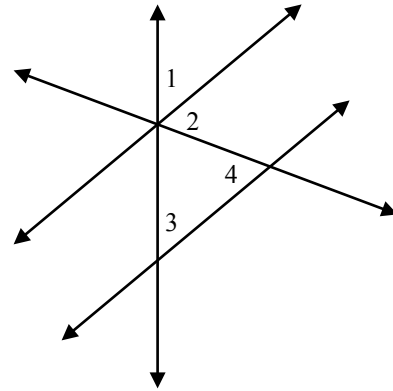


Proof Presentations

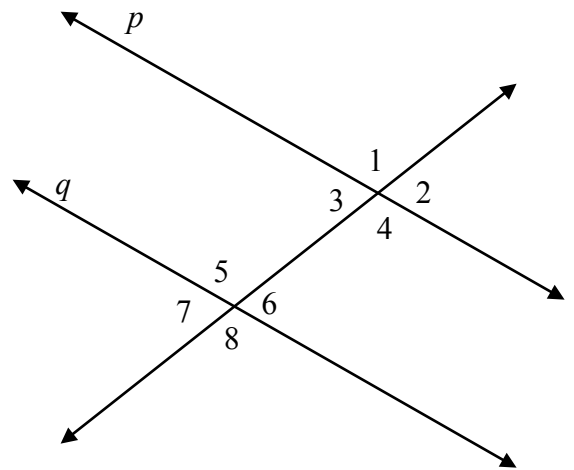
Each group of students will be assigned to do one or two of these proofs. The group must have:

- a recorder who will fill out the proof on behalf of the group (everyone must still have their own completed sheet at the end of this activity)
- a chalkboard scribe who will go to the board to write the proof for the class to see
- an orator who will go to the board with the scribe and explain the logic of each step

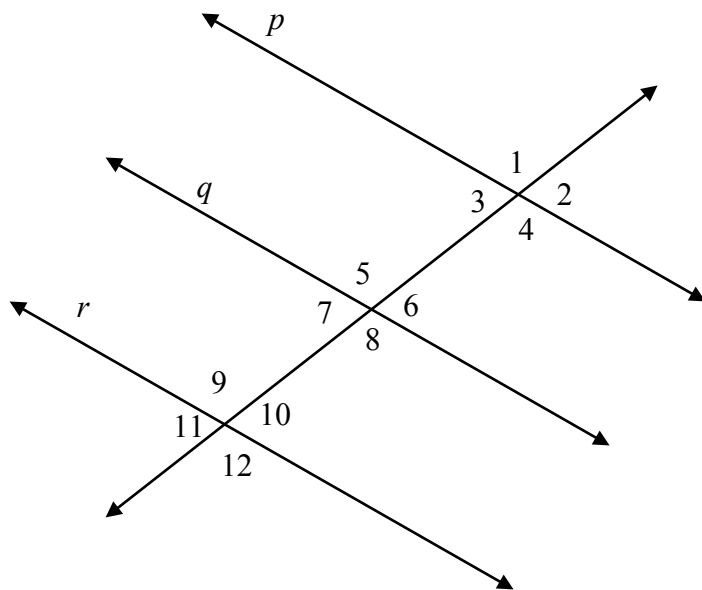
1) Given $\angle 1 \cong \angle 3$, prove $\angle 2 \cong \angle 4$



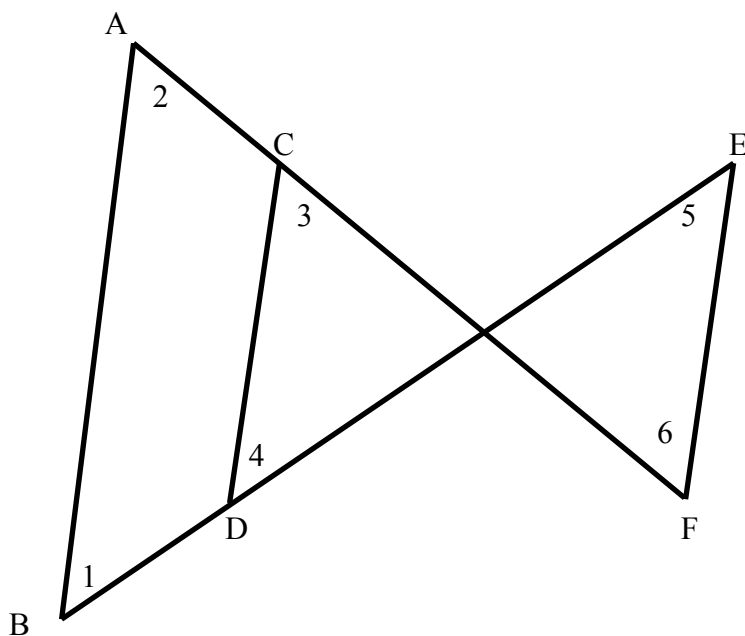
2) Given $\angle 1$ is supplementary to $\angle 7$, prove $\angle 4 \cong \angle 5$



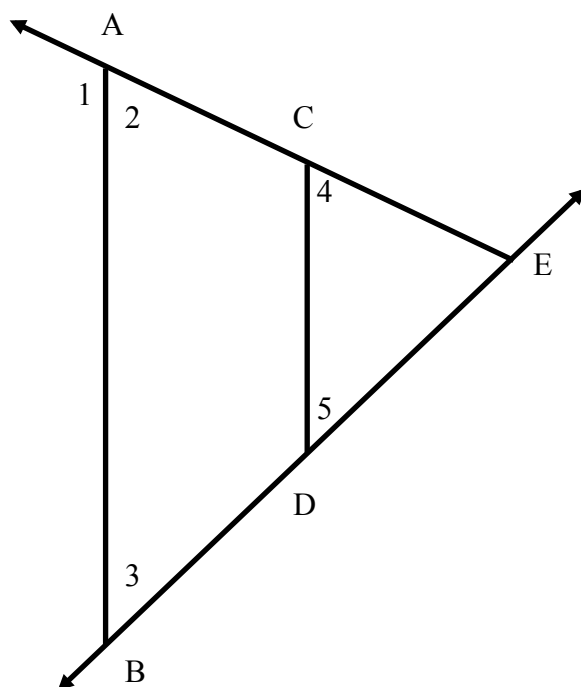
3) Given $\angle 2$ is supplementary to $\angle 8$ and $\angle 5$ is supplementary to $\angle 10$, prove $p \parallel r$



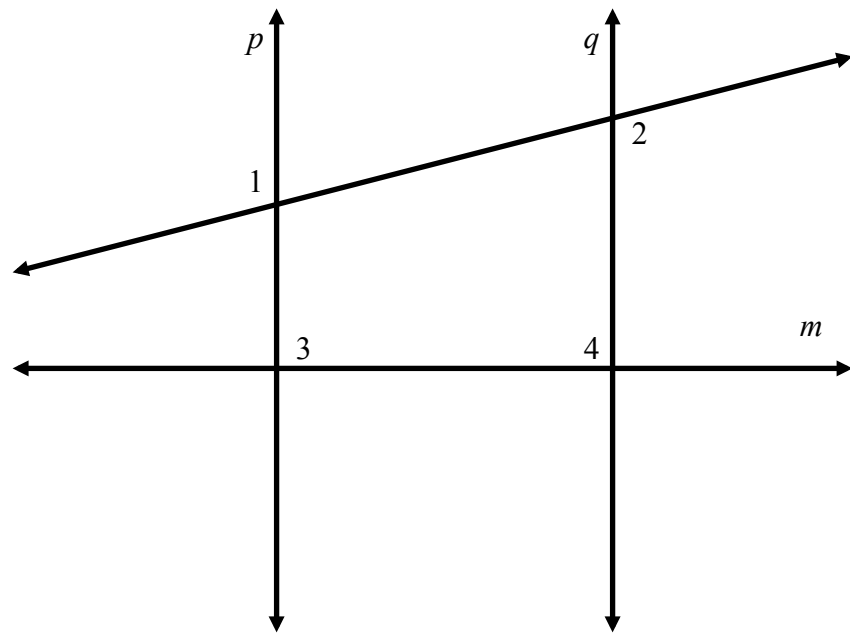
4) Given $\angle 1 \cong \angle 5$ and $\angle 2 \cong \angle 3$, prove $\angle 3 \cong \angle 6$



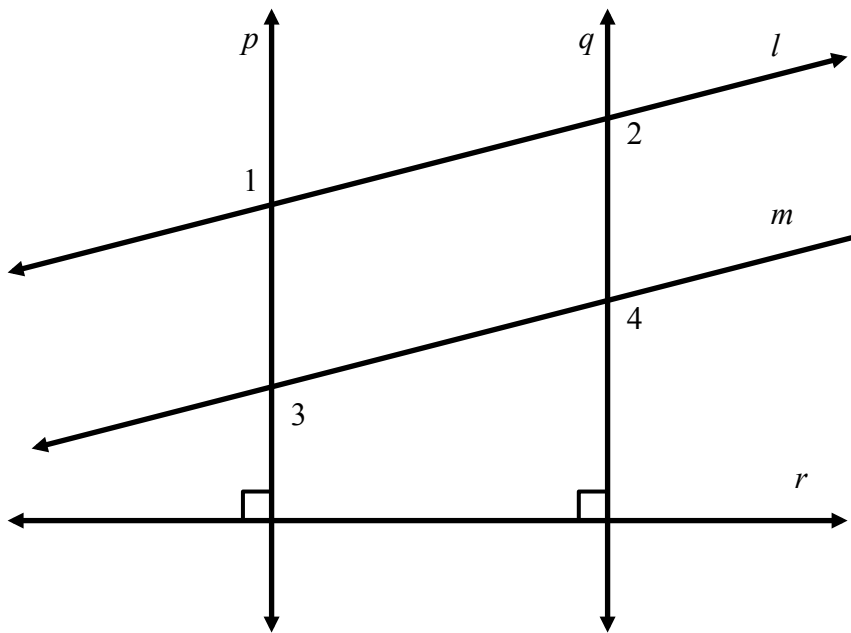
5) Given $\angle 1$ is supplementary to $\angle 4$ and $\angle 2 \cong \angle 3$, prove $\angle 4 \cong \angle 5$



6) Given $p \perp m$ and $\angle 3 \cong \angle 4$, prove $\angle 1 \cong \angle 2$



7) Given $\angle 2 \cong \angle 3$, prove $l \parallel m$



8) Given $\angle 3$ is supplementary to $\angle 4$ and $\angle 1 \cong \angle 2$, Prove $\angle 4 \cong \angle 5$

